

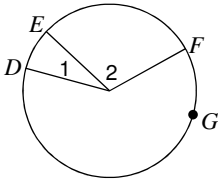
Circles #1: Central angles and arcs

© 2014 Kuta Software LLC. All rights reserved.

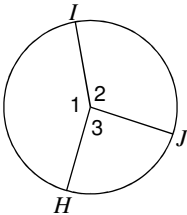
Date_____ Period____

Name the arc made by the given angle.

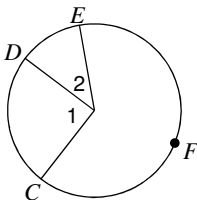
1) $\angle 1$



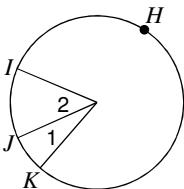
2) Major arc for $\angle 2$



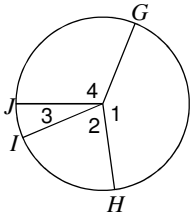
3) Major arc for $\angle 2$



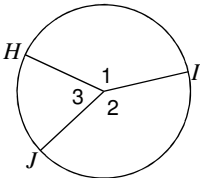
4) Major arc for $\angle 1$



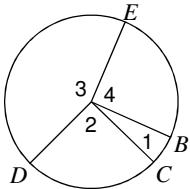
5) $\angle 2$



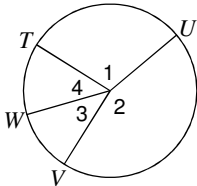
6) $\angle 1$



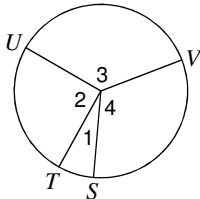
7) Major arc for $\angle 1$



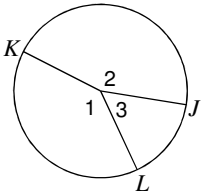
8) Major arc for $\angle 1$



9) $\angle 1$

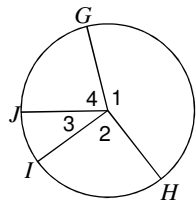


10) $\angle 2$

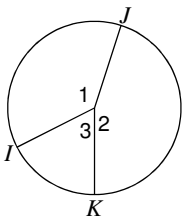


Name the central angle of the given arc.

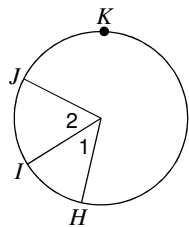
11) \widehat{GH}



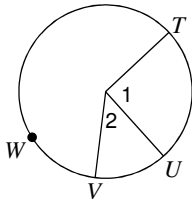
12) \widehat{IJK}



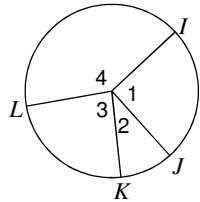
13) \widehat{HI}



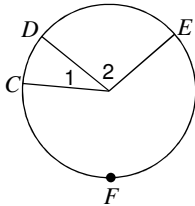
14) \widehat{UWV}



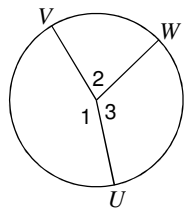
15) \widehat{JK}



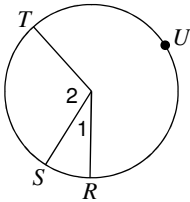
16) \widehat{DE}



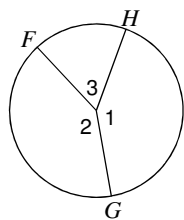
17) \widehat{UV}



18) \widehat{SUT}



19) \widehat{GHF}



20) \widehat{NLM}

